




Class - 1

Holiday Home Work

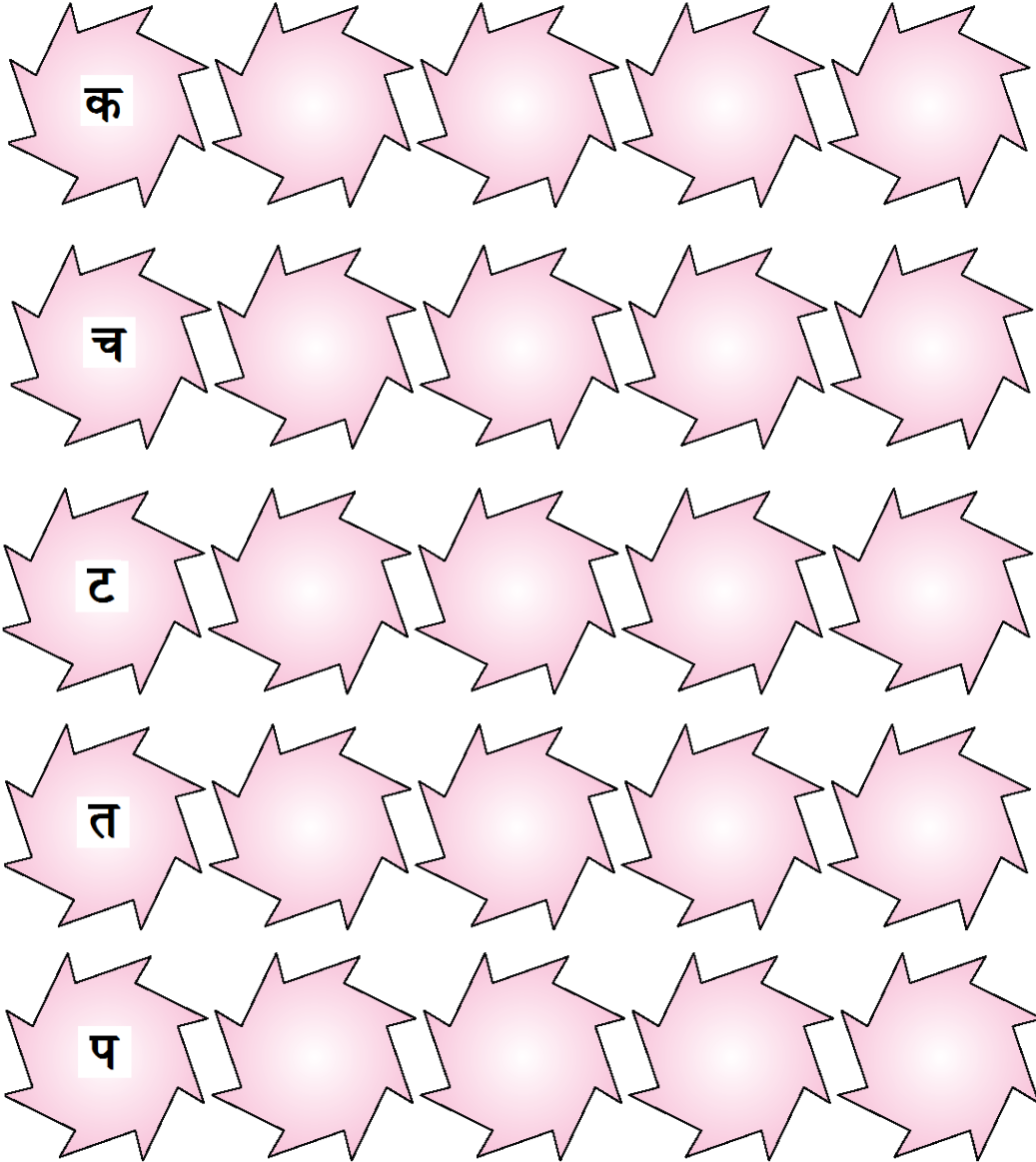
<i>INDEX</i>		
S. No.	Subject	Page
1	Hindi	1 - 7
2	Urdu	8 - 9
3	English	10 - 12
4	Math	13 - 22
5	EVS	23 - 27




































I. पढ़िए और लिखिए। (स्वर अक्षर)
रिक्त स्थान भरिए।




II. व्यंजन अक्षर 'क से प वर्ग' तक लिखिए।



III. चित्र देखकर अक्षर लिखिए और वर्णमाला पूरी कीजिए -

				ङ च ज ख ग घ
<input type="text"/>	<input type="text"/>	<input type="text"/>	<input type="text"/>	
				
<input type="text"/>	<input type="text"/>	<input type="text"/>	<input type="text"/>	
				
<input type="text"/>	<input type="text"/>	<input type="text"/>	<input type="text"/>	
				
<input type="text"/>	<input type="text"/>	<input type="text"/>	<input type="text"/>	<input type="text"/>
				
<input type="text"/>	<input type="text"/>	<input type="text"/>	<input type="text"/>	<input type="text"/>
				
<input type="text"/>	<input type="text"/>	<input type="text"/>	<input type="text"/>	
				
<input type="text"/>	<input type="text"/>	<input type="text"/>	<input type="text"/>	
				
<input type="text"/>	<input type="text"/>	<input type="text"/>		

IV. संयुक्त अक्षर लिखिए।








V. अक्षर को उस की मात्रा से मिलाइए।

स्वर	मात्रा
आ	७
इ	१
ई	२
उ	४
ऊ	३
ऋ	५
ए	६
ऐ	८
ओ	९
औ	१०


VI. 'आ' अक्षर का प्रयोग कर शब्द बनाइए।



VII. अक्षरों को जोड़कर शब्द बनाइए।



क्र.सं.	चित्र	अक्षर	+	अक्षर	शब्द
1)		ख	+	त	
2)		व	+	र	
3)		ब	+	स	
4)		प	+	द	
5)		घ	+	र	

VIII. चित्र की सहायता से शब्द बनाइए।

			
			र
			
	स		त

			
उ	ब		न
			
न			
			
			क्ष

			
			च
			
	च		न

			
अ		र	
			
ब			द
			

1. _____
2. _____
3. _____
4. _____
5. _____

IX. स्वर अक्षर का मनोरेखा-चित्र (Mind-Map) बनाएँ।

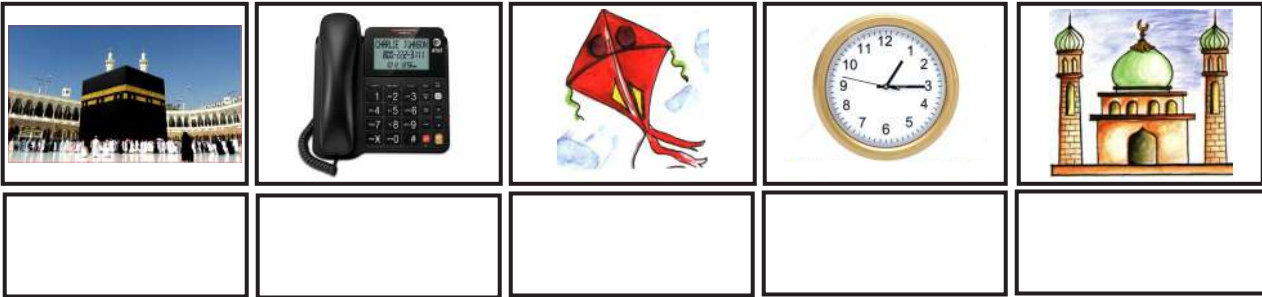
۱۔ حروف تہجی ”ا“ سے ”ے“ تک لکھیے۔

۲۔ حروف کو جوڑ کر الفاظ بنائیے۔

1. ز + م + ی + ن _____
2. چ + ا + ن + د _____
3. م + و + ت + ی _____
4. م + س + ج + د _____
5. ج + ن + گ + ل _____
6. م + ح + ن + ت _____
7. م + ح + ن + ت _____
8. ص + ح + ب + ت _____
9. ک + م + ب + ل _____
10. م + خ + م + ل _____


۳۔ کوئی (20) بیس تین حرفی الفاظ (جوڑ والے) لکھیے۔

-IV مندرجہ ذیل تصویروں کے نام لکھیے۔



-V آپ کے پسندیدہ کوئی 10 دس پرندوں کی تصاویر چسپاں کیجیے۔ اور ان کے نام لکھیے۔

1. Colour and name the picture. Write 2 sentences about this bird.





2. Circle the naming words (Nouns) in the poem given below.


Sippity sup, Sippity sup,
 Bread and milk from a china cup
 Bread and milk from a bright silver spoon
 Made of a piece of the bright silver moon
 Sippity Sippity sup,

3. Write any 3 action words.


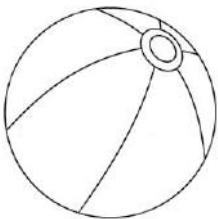
4. Write any 3 words that describe your mother.

5. Collect and paste / draw pictures of 2 animals and 2 things whose names begin with vowels. Write the names in the spaces provided.





6. Name the picture and add 'a' or 'an' to it.



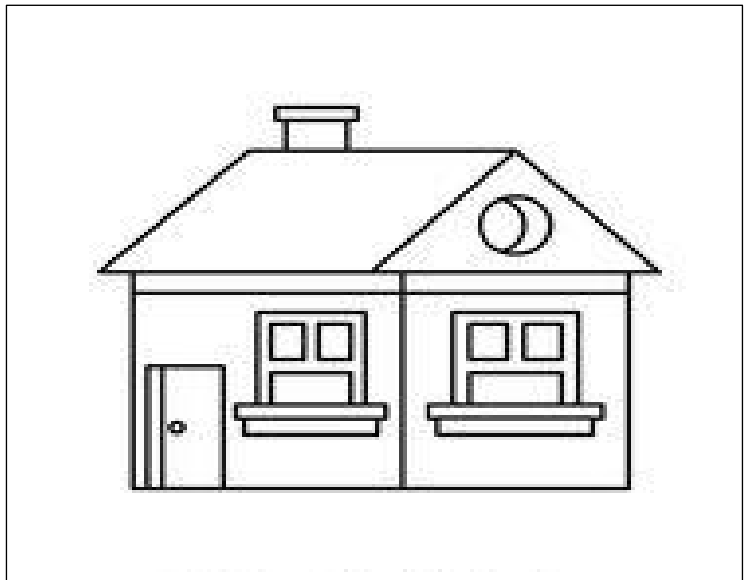
7. Read the poem and fill in the blanks with correct describing word:-

My house is red- a little house,
A happy child am I.

I laugh and play, the whole day long
 I hardly ever cry.
 I have a tree, a green green tree
 To shade me from the sun.

Now , fill in the following blanks-

- 1) My house is r_____.
- 2) A h_____ child am I.
- 3) A l_____ house.
- 4) I laugh and play the w_____ day long.
- 5) I have a g_____ tree.



8. Make any five sentences using the table.

I	are	a teacher.
He	is	a tall boy.
They	am	playing.
We		reading a book.
It		a blue cap.

1. _____
2. _____
3. _____
4. _____
5. _____

9. Draw a mind map for the ‘THINGS I DO AFTER I WAKE UP’

Fill in the missing numbers in the chart.

101	102	103	104	105	106				110
				115		117	118		120
121			124			127			130
		133						139	140
	142				146				150
151				155					160
		163					168		170
	172					177			180
181			184					189	190
	192				196				200

Write backward numbers.

a)

10									1
----	--	--	--	--	--	--	--	--	---

b)

20									11
----	--	--	--	--	--	--	--	--	----

c)

30									21
----	--	--	--	--	--	--	--	--	----

d)

40									31
-----------	--	--	--	--	--	--	--	--	-----------

e)

50									41
-----------	--	--	--	--	--	--	--	--	-----------

Write the number names for the following numbers:

Numbers	Number names	Numbers	Number names
11		57	
45		60	
32		84	
26		75	
12		99	
19		63	
33		56	
41		73	
20		88	

Write in ascending and descending order.

	Ascending order	Descending order
a) 13 15 3 5 18		
b) 21 27 32 19 13		
c) 17 23 19 15 22		
d) 65 45 35 25 15		
e) 60 80 100 90 70		

Compare the given numbers and put in the correct symbol

<, > or =.

79	80	57	57
71	15	32	23
94	95	15	17


Write the number that comes before the given number.

_____ 30	_____ 91	_____ 54	_____ 18	_____ 100
--	--	--	--	---

Write the number that comes before the given number.

59 _____	19 _____	38 _____	44 _____	90 _____
--	--	--	--	--

Write the ordinal numbers for the sea animals.



Write the position of turtle

Write the position of animal before dolphin

Write the position of last animal

Write the position of animal after star fish

Which position sea horse takes?

Who is leading between crab and polar bear?

Which animal before octopus and write its position

Which is your favorite animal?

Add.

$\begin{array}{r} 3 \\ + 7 \\ \hline \end{array}$	$\begin{array}{r} 4 \\ + 5 \\ \hline \end{array}$	$\begin{array}{r} 3 \\ + 9 \\ \hline \end{array}$	$\begin{array}{r} 7 \\ + 4 \\ \hline \end{array}$	$\begin{array}{r} 5 \\ + 8 \\ \hline \end{array}$	$\begin{array}{r} 2 \\ 3 \\ + 7 \\ \hline \end{array}$
---	---	---	---	---	--

$\begin{array}{r} 41 \\ + 16 \\ \hline \end{array}$	$\begin{array}{r} 72 \\ + 23 \\ \hline \end{array}$	$\begin{array}{r} 59 \\ + 30 \\ \hline \end{array}$	$\begin{array}{r} 36 \\ + 52 \\ \hline \end{array}$	$\begin{array}{r} 85 \\ + 11 \\ \hline \end{array}$	$\begin{array}{r} 86 \\ + 12 \\ \hline \end{array}$
---	---	---	---	---	---

Subtract.

$$\begin{array}{r} 7 \\ - 5 \\ \hline \\ \hline \end{array}$$

$$\begin{array}{r} 8 \\ - 6 \\ \hline \\ \hline \end{array}$$

$$\begin{array}{r} 9 \\ - 3 \\ \hline \\ \hline \end{array}$$

$$\begin{array}{r} 8 \\ - 4 \\ \hline \\ \hline \end{array}$$

$$\begin{array}{r} 6 \\ - 2 \\ \hline \\ \hline \end{array}$$

$$\begin{array}{r} 5 \\ - 3 \\ \hline \\ \hline \end{array}$$

$$\begin{array}{r} 77 \\ - 35 \\ \hline \\ \hline \end{array}$$

$$\begin{array}{r} 69 \\ - 21 \\ \hline \\ \hline \end{array}$$

$$\begin{array}{r} 98 \\ - 58 \\ \hline \\ \hline \end{array}$$

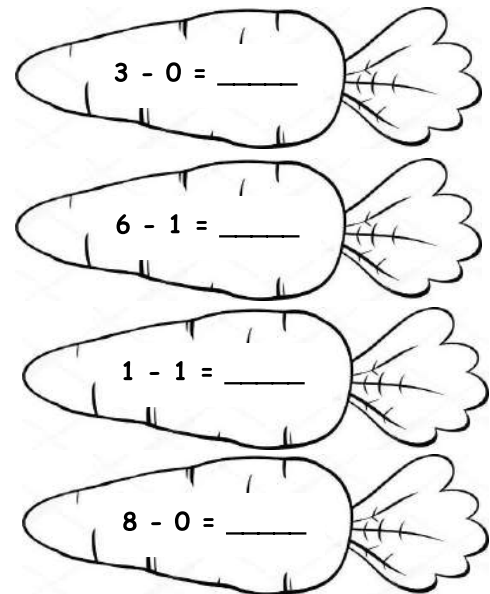
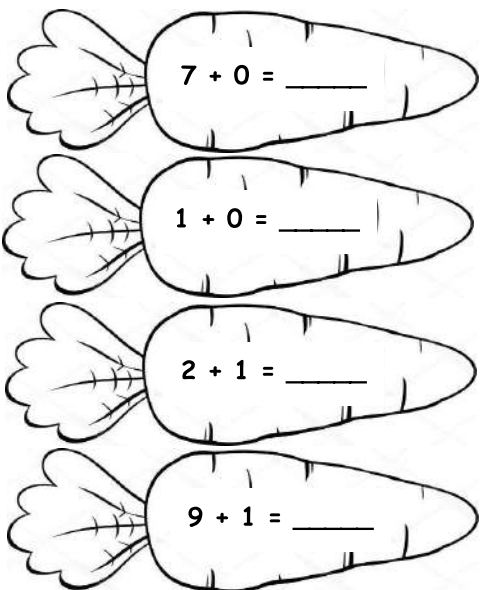
$$\begin{array}{r} 46 \\ - 15 \\ \hline \\ \hline \end{array}$$

$$\begin{array}{r} 87 \\ - 27 \\ \hline \\ \hline \end{array}$$

$$\begin{array}{r} 53 \\ - 32 \\ \hline \\ \hline \end{array}$$

Horizontal Addition with '0' & '1'

Horizontal Subtraction with '0' & '1'



10 More than

55	
23	
76	
18	

10 Less than

20	
31	
85	
96	

Solve the following:

$48 + 10 = \underline{\quad} \rightarrow I$

$59 - 9 = \underline{\quad} \rightarrow G$

$92 - 10 = \underline{\quad} \rightarrow T$

$50 + 1 = \underline{\quad} \rightarrow R$

$76 - 6 = \underline{\quad} \rightarrow E$

Filling the letters according the answer:

82	58	50	70	51

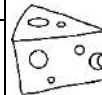
Which animal was hidden in this numbers?_____.

Skip counting by 2's

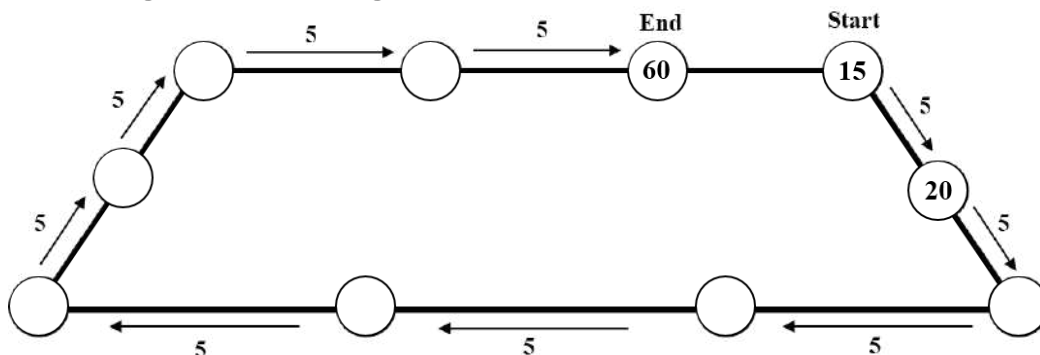
Using a crayon or colour pencil help Mouse to find way from 2 to 50 counting by 2's in numerical order to get its cheese.



Start	2	4	6	6	7	2	1	3	4
4	2	3	8	9	8	3	2	50	End
1	14	12	10	10	9	6	7	48	9
5	16	1	12	11	3	10	11	46	8
13	18	20	22	12	18	19	42	44	20
11	16	15	24	23	24	38	40	1	21
15	17	11	26	28	10	36	3	30	2
3	18	19	20	30	32	34	28	29	1



Fill in the missing numbers. Begin start



Write the multiplication table of 2.

Multiply.

$$\begin{array}{r} 9 \\ \times 2 \\ \hline \end{array}$$

$$\begin{array}{r} 3 \\ \times 2 \\ \hline \end{array}$$

$$\begin{array}{r} 5 \\ \times 5 \\ \hline \end{array}$$

$$\begin{array}{r} 8 \\ \times 5 \\ \hline \end{array}$$

$$\begin{array}{r} 10 \\ \times 2 \\ \hline \end{array}$$

$$\begin{array}{r} 10 \\ \times 5 \\ \hline \end{array}$$

$$\begin{array}{r} 9 \\ \times 5 \\ \hline \end{array}$$

$$\begin{array}{r} 6 \\ \times 2 \\ \hline \end{array}$$

10 x 10 = _____.

7 x 5 = _____.


8 x 2 = _____.


10 x 8 = _____.


4 x 2 = _____.


5 x 3 = _____.

Shapes puzzle.

I am  **T** _____

S _____ I am 

_____ **R** _____ I am 

_____ **C** _____ I am 

Days of the week

Unscramble the words.

DSAUYN	<input type="text"/>
MDOANY	<input type="text"/>
UDTAEYS	<input type="text"/>
EWSEDDNAY	<input type="text"/>
UTDHRAYS	<input type="text"/>
RAYIDF	<input type="text"/>
AYTRUASD	<input type="text"/>


Fill the dates of the present month from the calendar.

Month _____.

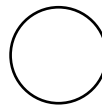
Monday	Tuesday	Wednesday	Thursday	Friday	Saturday	Sunday
<input type="text"/>	<input type="text"/>	<input type="text"/>	<input type="text"/>	<input type="text"/>	<input type="text"/>	<input type="text"/>
<input type="text"/>	<input type="text"/>	<input type="text"/>	<input type="text"/>	<input type="text"/>	<input type="text"/>	<input type="text"/>
<input type="text"/>	<input type="text"/>	<input type="text"/>	<input type="text"/>	<input type="text"/>	<input type="text"/>	<input type="text"/>
<input type="text"/>	<input type="text"/>	<input type="text"/>	<input type="text"/>	<input type="text"/>	<input type="text"/>	<input type="text"/>

- 1) Which is the first day of the month?**
- 2) Which month is this?**
- 3) Which is the last day of the month?**
- 4) How many Mondays are there in this month?**
- 5) How many days are in this month?**
- 6) How many weeks are there in this month?**

- 7) What day of the week falls on the 15th?
- 8) What is the date of the third Monday for the month?
- 9) How many days are there in 3 weeks?
- 10) What is the date on the second Wednesday for the month?



Count the shapes in above picture.





Name the shape that occurs most

Name the shape that occurs less

Draw a MIND MAP on Months of a year 2019

I. FUN IN RAIN

Which of the following do you see in the rain? Colour them.



II. Given below are few things that you find in a classroom. Fill in the crossword using the picture clues given below:

The crossword puzzle grid contains the following words:

- Across:**
 - Row 2: C _ A _ K
 - Row 4: C _ _ _ I _
 - Row 5: D _ S P _ _ Y B _ _ D
 - Row 6: _ _ _ B _ _ _ _ _
 - Row 7: _ _ _ _ _ D _ S _ _
 - Row 8: T _ F _ N _ _ _ _
 - Row 9: _ _ _ _ _ D _ _ _ _
 - Row 10: N _ _ _ _ _ _ _ _
- Down:**
 - Column 1: T B _ _ N
 - Column 2: _ _ _ _
 - Column 3: C
 - Column 4: _ _ _ B _ _
 - Column 5: _ _ _ _
 - Column 6: _ _ _ _
 - Column 7: _ _ _ _
 - Column 8: _ _ _ _
 - Column 9: _ _ _ _
 - Column 10: _ _ _ R

Illustrated items include: a pencil holder, a blackboard, a bookshelf, a notice board, a chair, a trash bin, a fan, a desk, and a stack of books.

III. Fill in the crossword taking help from the given picture clues:

1 N

2 M

3 F 4 T

5 F 6 K

7 H

8 L G D

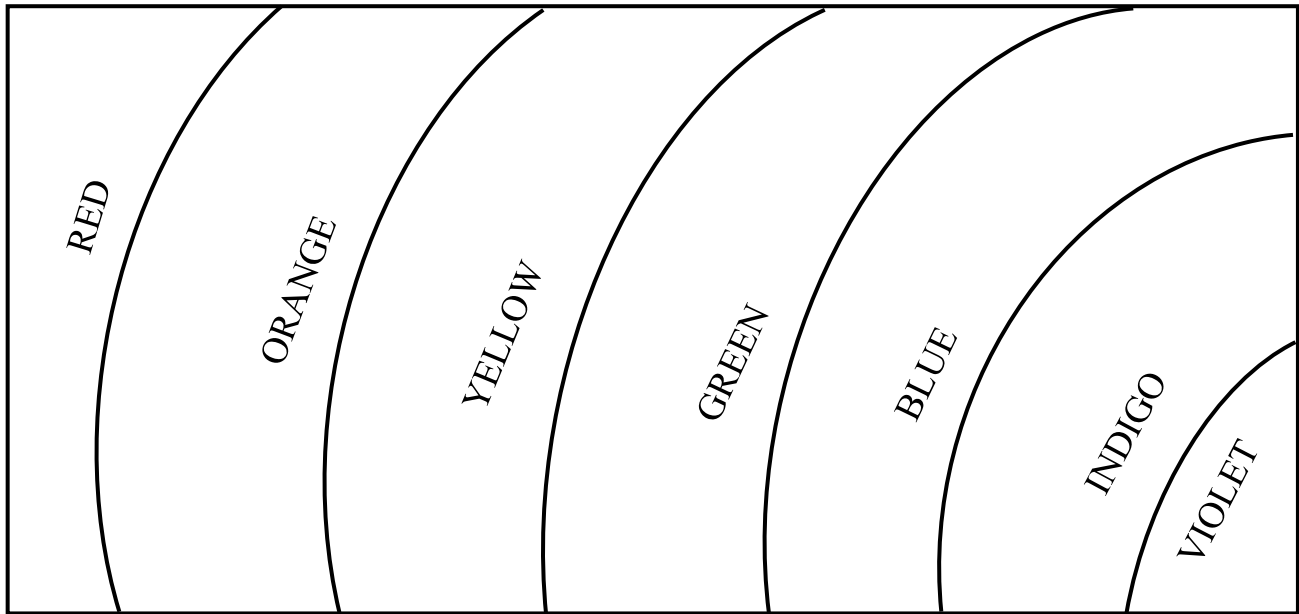
9 H 10 A

11 E

12 E 13 H

14 S O L S

IV. Look at the given picture and colour the rainbow accordingly:



V – Violet

I – Indigo

B – Blue

G – Green

Y – Yellow

O – Orange

R – Red

V. Draw a mind map of Family.

