



Class - 2

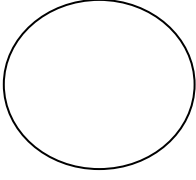
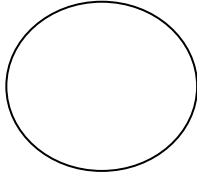
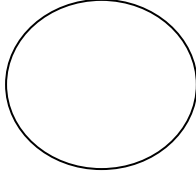
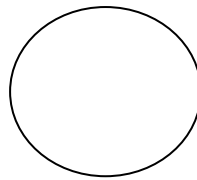



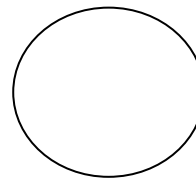



Holiday Home Work

| <i>INDEX</i> | | |
|---------------------|----------------|----------------|
| S. No. | Subject | Page |
| 1 | Hindi | 1 - 7 |
| 2 | Urdu | 8 - 9 |
| 3 | English | 10 - 12 |
| 4 | Math | 13 - 20 |
| 5 | EVS | 21 - 24 |

























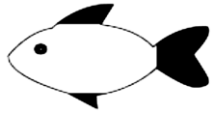
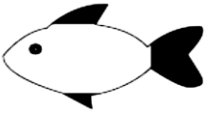


I. दिए गए चित्र में स्वर, व्यंजन और संयुक्ताक्षर लिखिए।

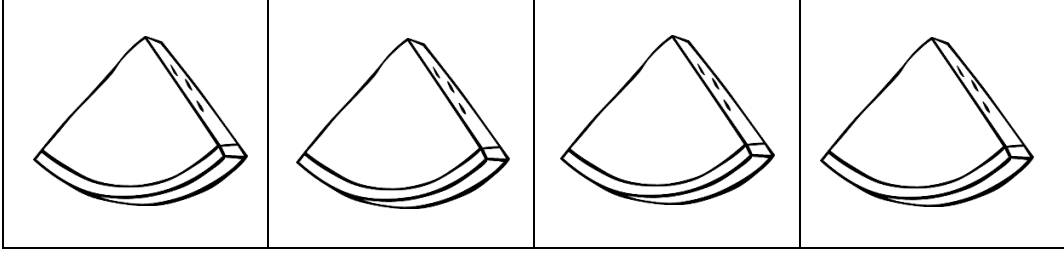
1. स्वर लिखिए।

| | | | | |
|---|---|---|--|---|
| अ |  |  |  |  |
|  |  |  |  |  |
| |  |  | अः | |

2. व्यंजन लिखिए।


| | | | | |
|---|---|---|--|---|
| क |  |  |  |  |
| च |  |  |  |  |
| ट |  |  |  |  |
| त |  |  |  |  |
| प |  |  |  |  |
| य |  |  |  |  |
| ष | |  |  | |

3. संयुक्ताक्षर लिखिए।

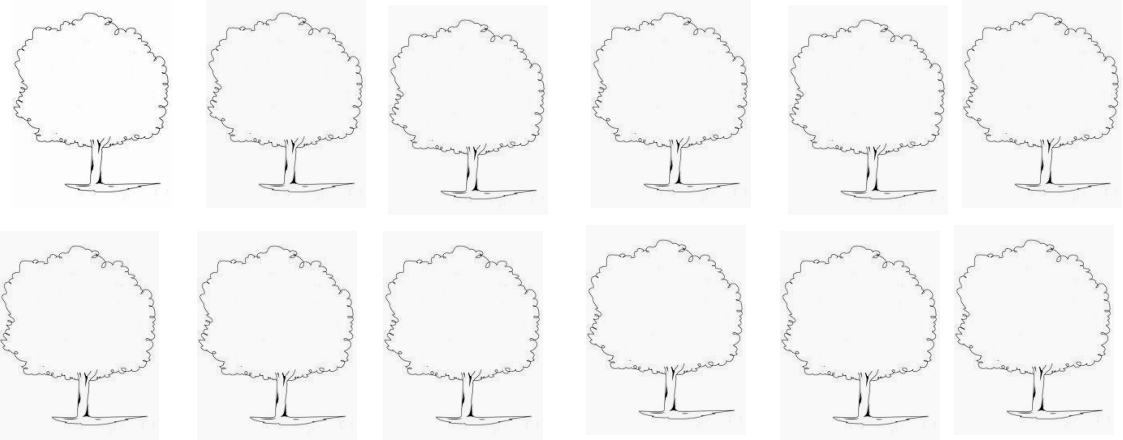


II. निम्न अक्षरों की बारहखड़ी को सही क्रम में लिखिए।

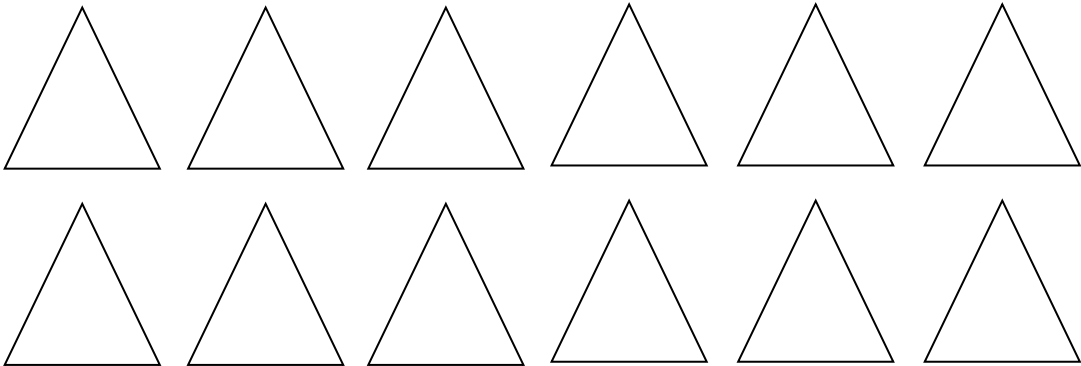
1. ग -




2. प -



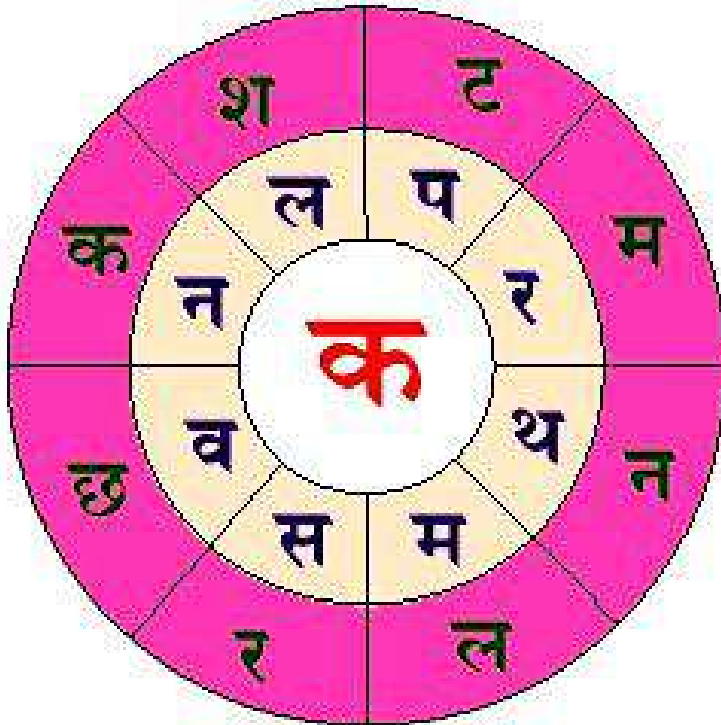
3. त्र -



4. स -



III. चक्र में आए अक्षरों को 'क' अक्षर से जोड़कर शब्द बनाइए।



| |
|-----|
| कमल |
| |
| |
| |

| |
|--|
| |
| |
| |
| |

IV. लिंग शब्द दिए गए हैं, स्त्रीलिंग और पुल्लिंग शब्द अलग करके लिखिए।

बुढ़िया, डिबिया, बहन, डिब्बा, चूहा, बंदर, बैल
नौकर, गाय, नाग, नौकरानी, आदमी, भाई,
पिता, बंदरिया, औरत, नागिन, बूढ़ा, चुहिया, माता

| स्त्रीलिंग | पुल्लिंग |
|------------|----------|
| | |
| | |
| | |
| | |
| | |
| | |
| | |
| | |
| | |
| | |
| | |
| | |
| | |
| | |
| | |
| | |
| | |
| | |

V. चित्र पहचान कर उसका नाम पूरा कीजिए।




_____ मल



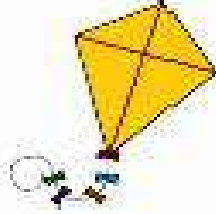
_____ घा



_____ खुआ



_____ डी



_____ तंग



_____ छली



_____ इका



_____ लजम



_____ टन



_____ सान



_____ लू



_____ नार

VI. अपना परिचय दीजिए -

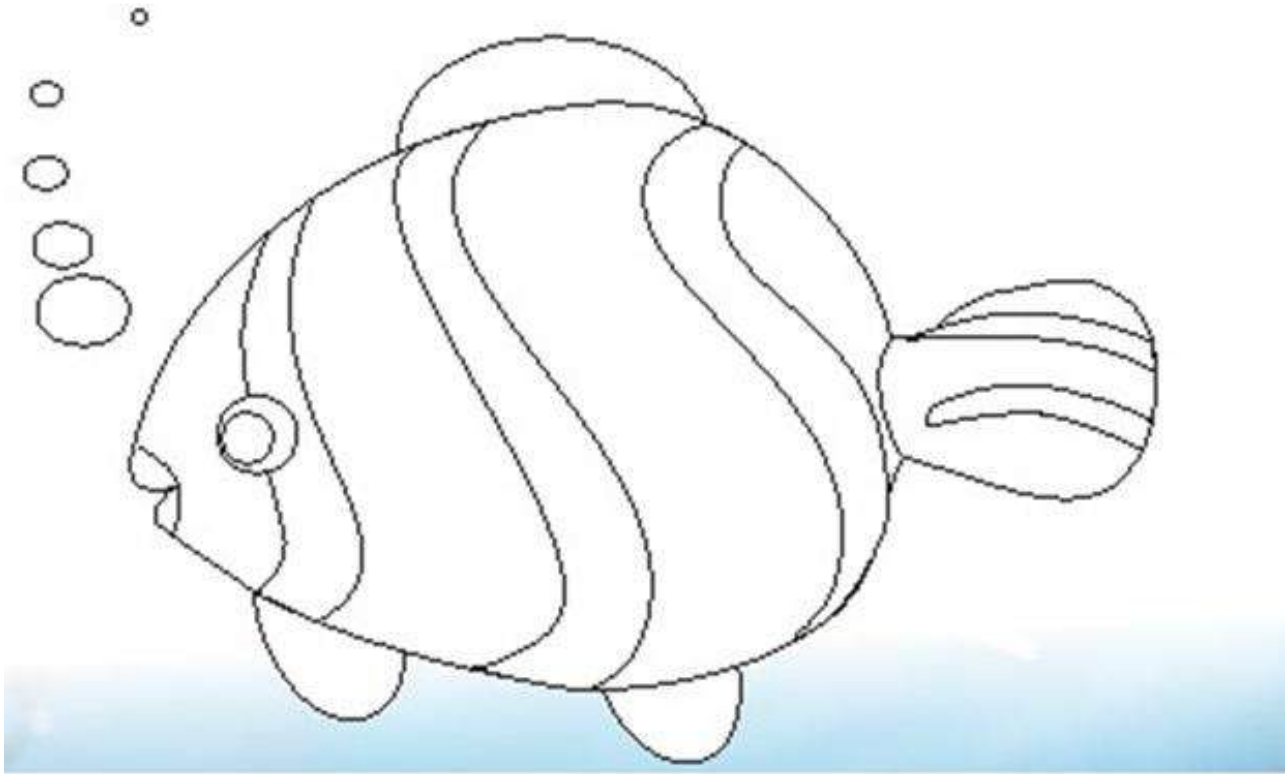
1. आप का नाम क्या है?

उ - _____

2. आप की पाठशाला का नाम क्या है?

उ - _____

VII. दिए गए उदाहरण के अनुसार मछली में रंग भरिए।



* सूचना:- कविता सुनाइए। (वाचन अभिव्यक्ति)

चित्र में रंग भरकर मछली पर पाँच वाक्य लिखिए।

| | |
|----|--|
| 1. | |
| 2. | |
| 3. | |
| 4. | |
| 5. | |

VIII. आपकी पाठ्य-पुस्तक में से किसी एक पाठ का मनोरेखा- चित्र
(Mind-Map) बनाएँ।

۱۔ حروف تہجی ”ا“ سے ”ے“ تک لکھیے۔

| | | | | | | | |
|--|--|--|--|--|--|--|--|
| | | | | | | | |
| | | | | | | | |
| | | | | | | | |
| | | | | | | | |
| | | | | | | | |

۱۱۔ مندرجہ ذیل تصویر دیکھ کر دس الفاظ لکھیے۔



- | | |
|-----------|----------|
| _____ .6 | _____ .1 |
| _____ .7 | _____ .2 |
| _____ .8 | _____ .3 |
| _____ .9 | _____ .4 |
| _____ .10 | _____ .5 |

III۔ تین حرفی لفظ پر دائرہ بنائیے۔

| | | | |
|-------|-------|-------|-------|
| قلم | کتاب | زمین | کاپی |
| زندگی | ندی | بندگی | انگور |
| پانی | شربت | مور | میٹھا |
| ایک | زندگی | خوشی | غم |
| سدا | سچا | بندگی | نیک |
| تری | رحمت | فن | مسلم |
| حکم | حاکم | شکست | حکومت |
| ماہر | سال | تفریح | رحمہل |
| ترقی | فوج | اللہ | بار |
| امیر | شریف | غریب | علی |

IV۔ حروف کو جوڑ کر الفاظ بنائیے۔

1. م + د + د = _____
2. د + ع + ا = _____
3. ن + ی + ا = _____
4. ف + ج + ر = _____
5. ق + س + م = _____
6. ع + ا + د + ت = _____
7. س + و + ا + ر = _____
8. د + و + س + ت = _____
9. غ + و + ط + ہ = _____
10. پ + س + ن + د = _____

V۔ مذکر اور مؤنث کو الگ الگ لکھیے۔

| | | | | |
|-------|------|-------|------|-------|
| گھوڑا | بیل | چاچی | مور | گھوڑی |
| چاچا | خالو | مورنی | خالہ | گائے |

مؤنث

مذکر

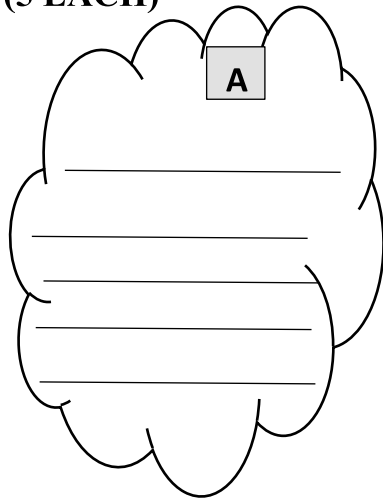
1. Colour and name the picture. Write 2 sentences about this fruit.



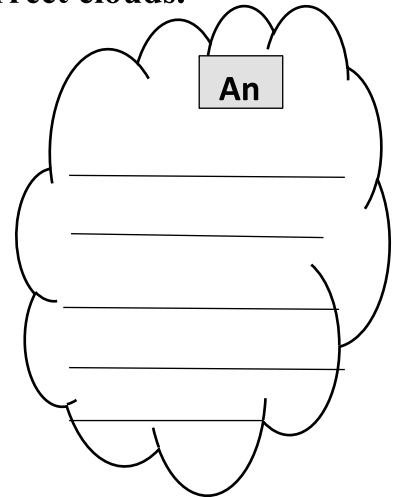
2. Make any 5 words using the letters of 'IMPORTANT'

| | | |
|-------|-------|-------|
| _____ | _____ | _____ |
| _____ | _____ | _____ |

3. Circle 10 words in the word search. Write them in the correct clouds.
(5 EACH)



| | | | | | | | |
|---|---|---|---|---|---|---|---|
| A | V | D | U | C | K | W | E |
| N | B | D | F | G | I | R | E |
| T | N | E | B | A | T | T | N |
| E | Q | R | T | Y | E | G | G |
| R | U | E | U | I | O | P | I |
| T | M | A | N | G | O | Y | N |
| Y | T | G | R | E | W | U | E |
| U | Y | L | H | W | L | I | E |
| T | R | E | E | Q | P | O | E |



4. Look at the picture and write the names of 8 nouns you see here.



8 NOUNS

5. Some of these words describe the sun and some do not. Complete these sentences with the correct words.

round

shine

red

cold

square

light

hot

1. The sun is very _____.
2. The sun is _____ in shape.
3. The sun _____ brightly.
4. The sun gives us _____.

6. Read the passage and answer the questions.**Nitu's Paper Boats**

The sky is dark. It is raining.

Nitu sits with her mother. They make paper boats.

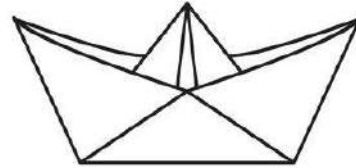
Look! It has stopped raining. The sun shines.

There is a pool of water in the garden.

Nitu's boats are in the pool. They go round round.

"Look up there," says Nitu's mother.

'There is a rainbow in the sky. The rainbow has seven colours!'

**Answer these questions.**

1. Who does Nitu sit with?

2. What do they make?

3. What is in the garden?

4. Where are Nitu's boats?

5. What is in the sky?

6. Do you like playing in pools of rain-water?

Complete the following. (Number name/numeration)

237

Four hundred fifty six

102

Four hundred five

390

Fill in the boxes.

$$1) 169 = 100 + \square + 9$$

$$2) 230 = 200 + \square + \square$$

$$3) 386 = \square + 80 + 6$$


$$4) 209 = 200 + \square + \square$$

$$5) 474 = \square + 70 + 4$$

Colour the odd numbers green. Colour the even numbers blue.

| | | | | | | | |
|-----|-----|-----|-----|-----|-----|-----|------|
| 34 | 45 | 38 | 437 | 24 | 372 | 358 | 50 |
| 29 | 734 | 620 | 545 | 33 | 50 | 59 | 1000 |
| 452 | 326 | 42 | 39 | 451 | 946 | 129 | 18 |
| 21 | 97 | 208 | 888 | 55 | 7 | 94 | 47 |
| 6 | 0 | 3 | 117 | 83 | 30 | 774 | 623 |

Write the position of the animals given below.



- a) Position of elephant is _____. (First/second)
- b) Position of zebra is _____.
- c) Position of tortoise is _____.
- d) Position of cow is _____.
- e) Position of kangaroo is _____.

Addition.

| | | | | |
|--------|--------|--------|--------|--------|
| 19 | 13 | 77 | 53 | 29 |
| $+ 34$ | $+ 18$ | $+ 16$ | $+ 27$ | $+ 48$ |
| _____ | _____ | _____ | _____ | _____ |
| _____ | _____ | _____ | _____ | _____ |

$28 + 0 = \underline{\hspace{2cm}}$ $33 + 1 = \underline{\hspace{2cm}}$ $72 + \underline{\hspace{2cm}} = 72$

$\underline{\hspace{2cm}} + 1 = 64$ $\underline{\hspace{2cm}} + 0 = 19$ $47 + \underline{\hspace{2cm}} = 48$

Subtraction.

| | | | | |
|---|---|---|---|---|
| $\begin{array}{r} 57 \\ - 38 \\ \hline \end{array}$ | $\begin{array}{r} 65 \\ - 27 \\ \hline \end{array}$ | $\begin{array}{r} 93 \\ - 54 \\ \hline \end{array}$ | $\begin{array}{r} 47 \\ - 17 \\ \hline \end{array}$ | $\begin{array}{r} 80 \\ - 19 \\ \hline \end{array}$ |
|---|---|---|---|---|

$55 - 0 = \underline{\quad}$

$36 - 1 = \underline{\quad}$

$18 - \underline{\quad} = 18$

$\underline{\quad} - 0 = 62$

$\underline{\quad} - 1 = 89$

$77 - \underline{\quad} = 76$

Multiplication.

| | | | | |
|---|---|---|--|--|
| $\begin{array}{r} 24 \\ \times 2 \\ \hline \end{array}$ | $\begin{array}{r} 12 \\ \times 4 \\ \hline \end{array}$ | $\begin{array}{r} 33 \\ \times 3 \\ \hline \end{array}$ | $\begin{array}{r} 414 \\ \times 2 \\ \hline \end{array}$ | $\begin{array}{r} 323 \\ \times 3 \\ \hline \end{array}$ |
|---|---|---|--|--|

$4 \times 5 = \underline{\quad}$

$4 \times 7 = \underline{\quad}$

$5 \times 5 = \underline{\quad}$

$8 \times 3 = \underline{\quad}$

$6 \times 4 = \underline{\quad}$

$9 \times 7 = \underline{\quad}$

$7 \times 7 = \underline{\quad}$

$9 \times 1 = \underline{\quad}$

$8 \times 5 = \underline{\quad}$

Division.

| | | | | |
|--------------------|--------------------|--------------------|--------------------|--------------------|
| $2 \overline{)12}$ | $3 \overline{)27}$ | $4 \overline{)32}$ | $8 \overline{)56}$ | $9 \overline{)63}$ |
|--------------------|--------------------|--------------------|--------------------|--------------------|

$32 \div 8 = \underline{\quad}$

$24 \div 3 = \underline{\quad}$

$48 \div 6 = \underline{\quad}$

$56 \div 8 = \underline{\quad}$

$18 \div 2 = \underline{\quad}$

$40 \div 5 = \underline{\quad}$

$40 \div 4 = \underline{\quad}$

$72 \div 9 = \underline{\quad}$

$56 \div 7 = \underline{\quad}$




I am looking like a _____. I have _____ faces,
_____ edges and _____ corner.




I am looking like a _____. I have _____ faces,
_____ edges and _____ corner.



I am looking like a _____. I have _____ faces,
_____ edges and _____ corner.



I am looking like a _____. I have _____ faces,
_____ edges and _____ corner.








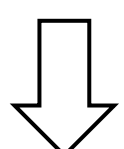
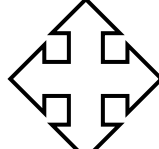
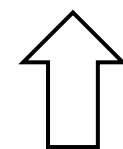


I am looking like a _____. I have _____ faces,
_____ edges and _____ corner.

Patterns




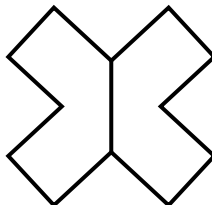
| | | | | | | |
|---------|-----|-----|-----|-------|-------|-------|
| (a) 4 | 8 | 12 | 16 | _____ | _____ | _____ |
| (b) 11 | 22 | 33 | 44 | _____ | _____ | _____ |
| (c) 50 | 55 | 60 | 65 | _____ | _____ | _____ |
| (d) 100 | 90 | 80 | 70 | _____ | _____ | _____ |
| (e) 201 | 203 | 205 | 207 | _____ | _____ | _____ |

Draw the sequence.

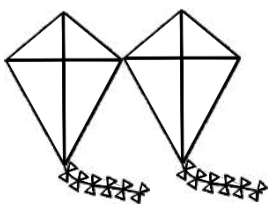

| | | | | | | |
|--|--|--|--|--|-------|-------|
|  |  |  |  |  | _____ | _____ |
|  |  |  |  |  | _____ | _____ |

Fractions.

Colour $\frac{1}{2}$.

| | | | |
|---|---|--|---|
|  |  |  |  |
|---|---|--|---|



Money.

* Veda bought  for ₹ 12 and a  for ₹ 40.



He spent ₹ _____ altogether.

* Iqra had ₹ 100. She bought a  for ₹ 20 and a  ₹ 45.

She spent ₹ _____. Now she has ₹ _____ left with her.

* A  cost ₹ 120 and a ball cost  ₹ 10.

Sid bought a  and . He spent altogether ₹ _____.

* Mickey had ₹ 150 . He spent ₹ 75 on a  and ₹ 42 on .

He has ₹ _____ left.

* A fruit seller has just these 3 weights. Write the correct combination of weights used to measure the weights of fruits.



| S.No. | Fruit Weight | Combination of weights |
|-------|--------------|------------------------|
| 1 | 10 kg | 5 kg + 5 kg |
| 2 | 12 kg | |
| 3 | 7 kg | |
| 4 | 8 kg | |
| 5 | 14 kg | |
| 6 | 15 kg | |
| 7 | 20 kg | |
| 8 | 17 kg | |

Use the calendar to answer the questions.

March 2019

| Sunday | Monday | Tuesday | Wednesday | Thursday | Friday | Saturday |
|-----------|-----------|-----------|-----------|-----------|-----------|-----------|
| 24 | 25 | 26 | 27 | 28 | 1 | 2 |
| 3 | 4 | 5 | 6 | 7 | 8 | 9 |
| 10 | 11 | 12 | 13 | 14 | 15 | 16 |
| 17 | 18 | 19 | 20 | 21 | 22 | 23 |
| 24 | 25 | 26 | 27 | 28 | 29 | 30 |
| 31 | 1 | 2 | 3 | 4 | 5 | 6 |

- (a) Which month is this calendar showing? _____.
- (b) What is the first day of the month? _____.
- (c) What is the total number of days in the given month? _____.
- (d) How many weeks does the given month has? _____.
- (e) What is the last day of the month? _____.
- (f) How many Monday's and Wednesday's are in the given month? _____.
- (g) On what day would the next month begin? _____.
- (h) Name the next and previous month of the calendar _____.
- (i) On which month you have born? _____.
- (j) Write the days which has 5 days in the given month.

_____, _____, _____.


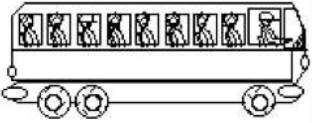


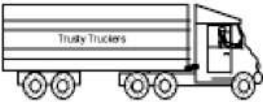


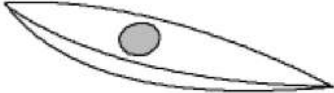
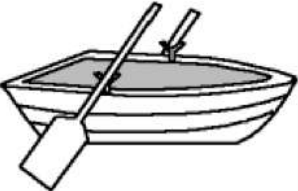


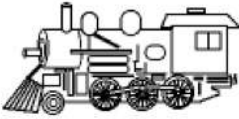




- (k) Write the names of all the months that have 30 days in a year.

- (l) Write the names of all the months that have 31 days in a year.

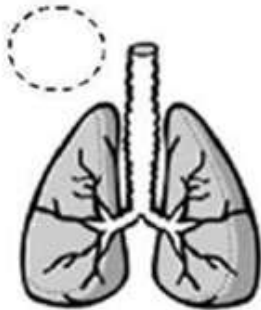
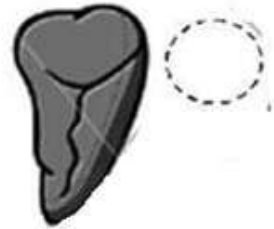
Draw a Mind Map on Measurement.

What am I? Transportation words

For each picture, choose the word that best describes it.



| | | | |
|--|--|---|---|
|  <p>boat bicycle wagon</p> |  <p>bus automobile van</p> |  <p>car minivan truck</p> |  <p>helicopter rowboat plane</p> |
|  <p>axel truck cart</p> |  <p>motorcycle tire bicycle</p> |  <p>castle ship trailer</p> |  <p>starboard pier kayak</p> |
|  <p>canoe rowboat pineapple</p> |  <p>wheel ship tricycle</p> |  <p>submarine sailboat ferry</p> |  <p>canoe car train</p> |
|  <p>van cart trail</p> |  <p>train taxi sleigh</p> |  <p>unicycle car boat</p> |  <p>wagon automobile sled</p> |

BODY INTERNAL ORGANS

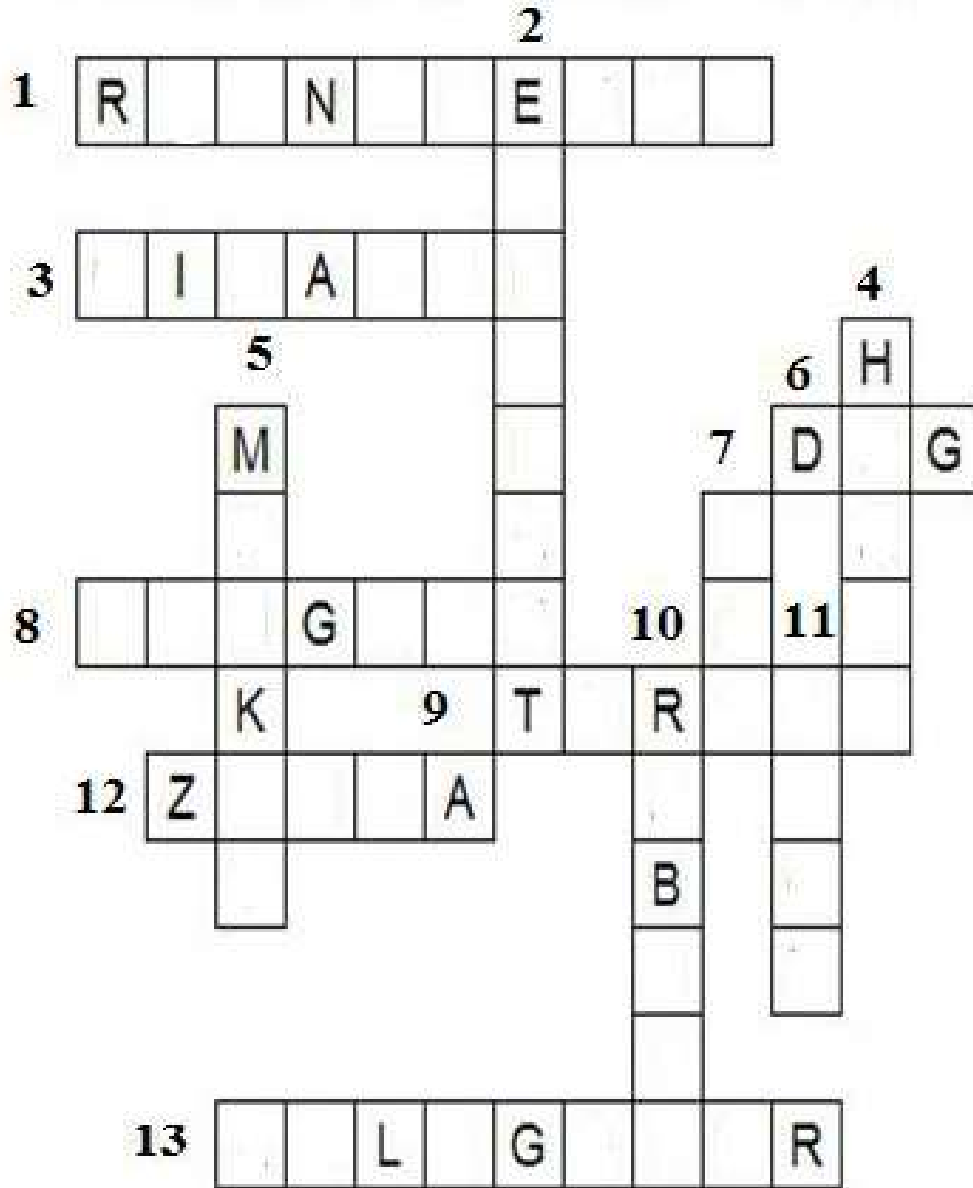


Write inside the circles the number that represents each Internal organ.

1. Liver.
2. Brain.
3. Bone.
4. Heart.
5. Lungs.
6. Bladder.
7. Kidneys.
8. Pancreas.
9. Intestine.
10. Stomach.



Animal Crossword Puzzle



ACROSS

1. Big animal that has one horn
3. This animal has a very long neck
6. Man's best friend
8. Lives in the cold and waddles
9. Slow moving and has a shell
12. Striped animal that looks like a horse
13. Can swim under water and walk on land has a big bite

DOWN

2. This animal has a long trunk
4. This animal likes to eat carrots and sugar cubes
5. This animal loves bananas
7. Some say this animal has nine lives
10. Has big ears and like to hop
11. King of the jungle

Draw a mind map of Festivals

